

Alg. 2 Warm Up #5-5

Find the x-intercepts:

1. $y = 2(x - 6)^2 - 32$

2. $y = 2x^2 - 2x - 24$

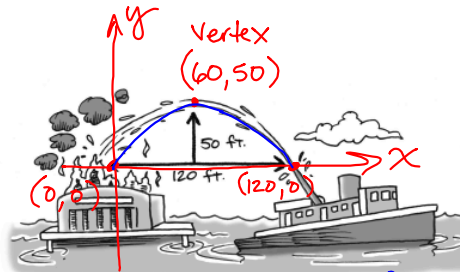
3. Use the zero product property to solve:

$$3x^2 - 5x - 2 = 0$$

HW Questions:

2-69. FIRE! CALL 9-1-1!

A fireboat in the harbor is helping put out a fire in a warehouse on the pier. The distance from the barrel (end) of the water cannon to the roof of the warehouse is 120 feet, and the water shoots up 50 feet above the barrel of the water cannon.



Use $y = a(x-h)^2 + k$
Put in the vertex (h, k)

Sketch a graph and find an equation of the parabola that models the path of the water from the fireboat to the fire. Give the domain and range for which the function makes sense in relation to the fireboat.

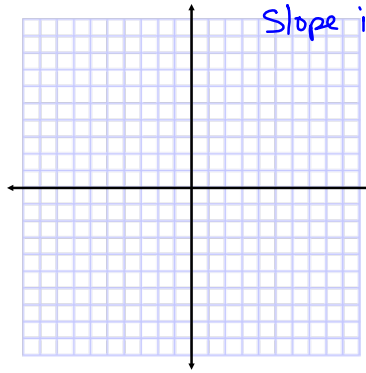
or use factored
form: $y = a(x-0)(x-120)$
plug in the vertex to
find "a"

Plug in one of the
x-int.'s to find a

2-70. Draw accurate graphs of $y = 2x + 5$, $y = 2x^2 + 5$, and $y = \frac{1}{2}x^2 + 5$ on the same set of axes. Label the intercepts.

- In the equation $y = 2x + 5$, what does the 2 tell you about the graph?
- Is the 2 in $y = 2x^2 + 5$ also the slope? Explain.

No, the 2 means it is a vertical stretch of 2
Slope is not constant on a curve.



2-71. Think about how you might sketch a parabola on a graph.

- Do the sides of a parabola ever curve back in like the figure at right? Explain your reasoning. No! Keeps going out.
- Do the sides of the parabola approach straight vertical lines as shown in the figure at right? (In other words, do parabolas have asymptotes?) Give a reason for your answer.



No! Keeps going out.

The domain is all real numbers

2-72. Find the equation of an exponential function that passes through each pair of points.

$$y = a(b)^x$$

a. (2,9) and (4,324)

b. (-1,40) and (0,12)

	2	3	4
	9		324

$\xrightarrow{\times b}$ $\xrightarrow{\times b}$

$$9b^2 = 324$$

Solve for b.

$$y = a(b)^x$$

plug in one of your points (x,y) and find a.

$$y = a(b)^x$$

$$9 = a(b)^2$$

$$\frac{9}{36} = \frac{a}{36}$$

$$a = \frac{1}{4}$$

	-1	0
	40	12

$\xrightarrow{\times b}$

$$a = 12$$

2-73. Find the x- and y-intercepts of the graphs of the two equations below.

a. $y = 2x^2 + 3x - 5$ ← y-int: (0,-5)

x-int:

$$0 = 2x^2 + 3x - 5$$

$$0 = (2x + 5)(x - 1)$$

try factoring ☺

If you can't figure it out, use the quadratic formula.

$$x = \frac{-b \pm \sqrt{b^2 - 4ac}}{2a}$$

b. $y = \sqrt{2x - 4}$

y-int: plug in 0 for x

$$y = \sqrt{2(0) - 4}$$

$$y = \sqrt{-4} \quad \text{" "}$$

There is no y-int.

x-int: plug in $y = 0$

$$0 = \sqrt{2x - 4}$$

Square both sides to solve for x.

- 2-74. The vertex of a parabola, point (h, k) , locates its position on the coordinate graph. The vertex thus serves as a **locator point** for a parabola. Other families of functions that you will be investigating in this course will also have locator points. These points have different names, but the same purpose for each different type of graph. They help you place the graph on the axes.

$$y = a(x - h)^2 + k \quad \text{vertex } (h, k)$$

Sketch graphs for both of the following equations. On each sketch, label the locator point.

$$\text{vertex: } (3, -7)$$

a. $y = 3x^2 + 5$

vertex form:

$$y = 3(x - 0)^2 + 5$$

plot the vertex,
then use vertical
stretch 3

b. $f(x) = -(x - 3)^2 - 7$

reflect in x-axis

- 2-75. If $g(x) = x^2 - 5$, find the value(s) of x so that:

a. $g(x) = 20$

outcome is 20:

$$x^2 - 5 = 20$$

Now solve.

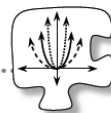
b. $g(x) = 6$

outcome is 6

CP's: 2- #64, 66, 67

2.1.5 How can I model the data?

Mathematical Modeling with Parabolas

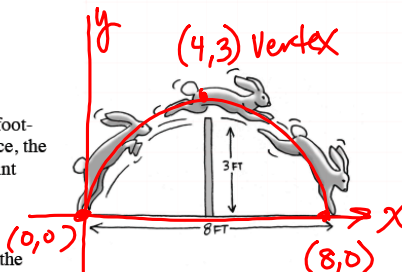


In the past few lessons, you have determined how to move graphs of parabolas around, that is, to transform them, on a set of axes. You have also learned how to write quadratic equations in graphing and in standard form. In this lesson you will put these new skills to work as you use parabolas and their equations to model situations.

2-64. JUMPING JACKRABBITS

The diagram at right shows a jackrabbit jumping over a three-foot-high fence. To just clear the fence, the rabbit must start its jump at a point four feet from the fence.

Sketch the situation and write an equation that models the path of the jackrabbit. Show or explain how you know your sketch and equation fit the situation.



$$y = a(x-0)(x-8) \quad y = a(x-4)^2 + 3$$

$$3 = a(4-0)(4-8) \quad 3 = a(0-4)^2 + 3$$

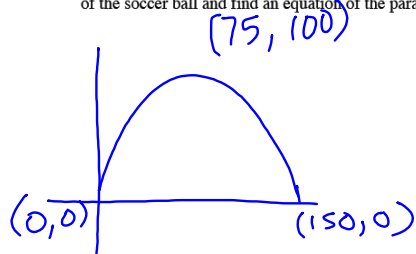
Discussion Points

How can we make a graph fit this situation?

What information do we need in order to find an equation?

How can we be sure that our equation fits the situation?

- 2-66. When Ms. Bibbi kicked a soccer ball, it traveled a horizontal distance of 150 feet and reached a height of 100 feet at its highest point. Sketch the path of the soccer ball and find an equation of the parabola that models it.



$$y = a(x-0)(x-150)$$

$$100 = a(75-0)(75-150)$$

$$100 = a(-5625)$$

$$\frac{100}{-5625} = \frac{a(-5625)}{-5625}$$

MATH

Frac enter enter

$$y = -\frac{4}{225}(x-0)(x-150)$$

$$y = -\frac{4}{225}x(x-150)$$

- 2-67. At the skateboard park, the hot new attraction is the *U-Dip*, a cement structure embedded into the ground. The cross-sectional view of the *U-Dip* is a parabola that dips 15 feet below the ground. The width at ground level, its widest part, is 40 feet across. Sketch the cross-sectional view of the *U-Dip*, and find an equation of the parabola that models it.

HW: Pink WS

(It says: CP's revised # 76)